



Cambridge International AS & A Level

GEOGRAPHY

9696/42

Paper 4 Advanced Human Geography Options

October/November 2021

INSERT

1 hour 30 minutes

INFORMATION

- This insert contains all the resources referred to in the questions.
- You may annotate this insert and use the blank spaces for planning. **Do not write your answers** on the insert.



This document has **4** pages.

Fig. 1.1 and Fig. 1.2 for Question 1

Simplified maps of two locations

Fig. 1.1

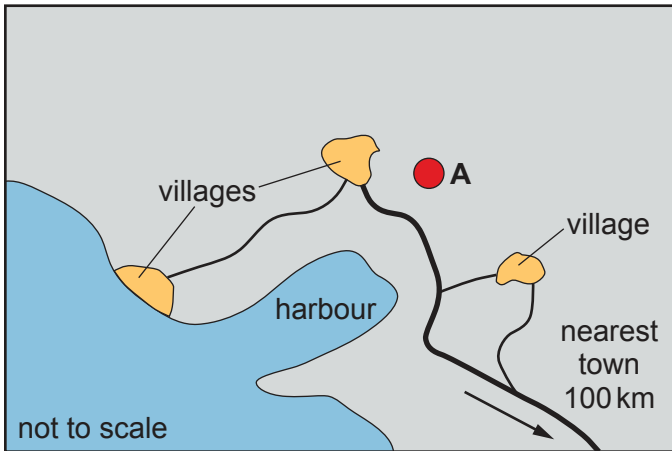
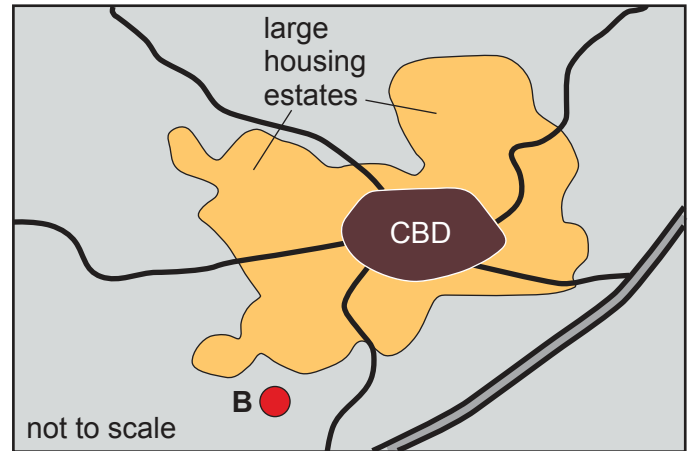


Fig. 1.2



Key






-  built-up area
-  industrial site
-  minor road
-  main road
-  motorway

Table 4.1 for Question 4

Use of water by sector, for the world, in 2020 and projected for 2030 and 2050

sector	2020	2030 (projected)	2050 (projected)
domestic	382	900	772
energy	470	828	766
industrial	314	672	1135
agriculture	2672	4500	4488
total	3838	6900	7161

data unit = cubic hectometres (hm^3)
 $1 \text{ hm}^3 = 1 \text{ million m}^3$

Fig. 7.1 for Question 7

Part of a port on the River Tagus in Portugal, an HIC in Europe


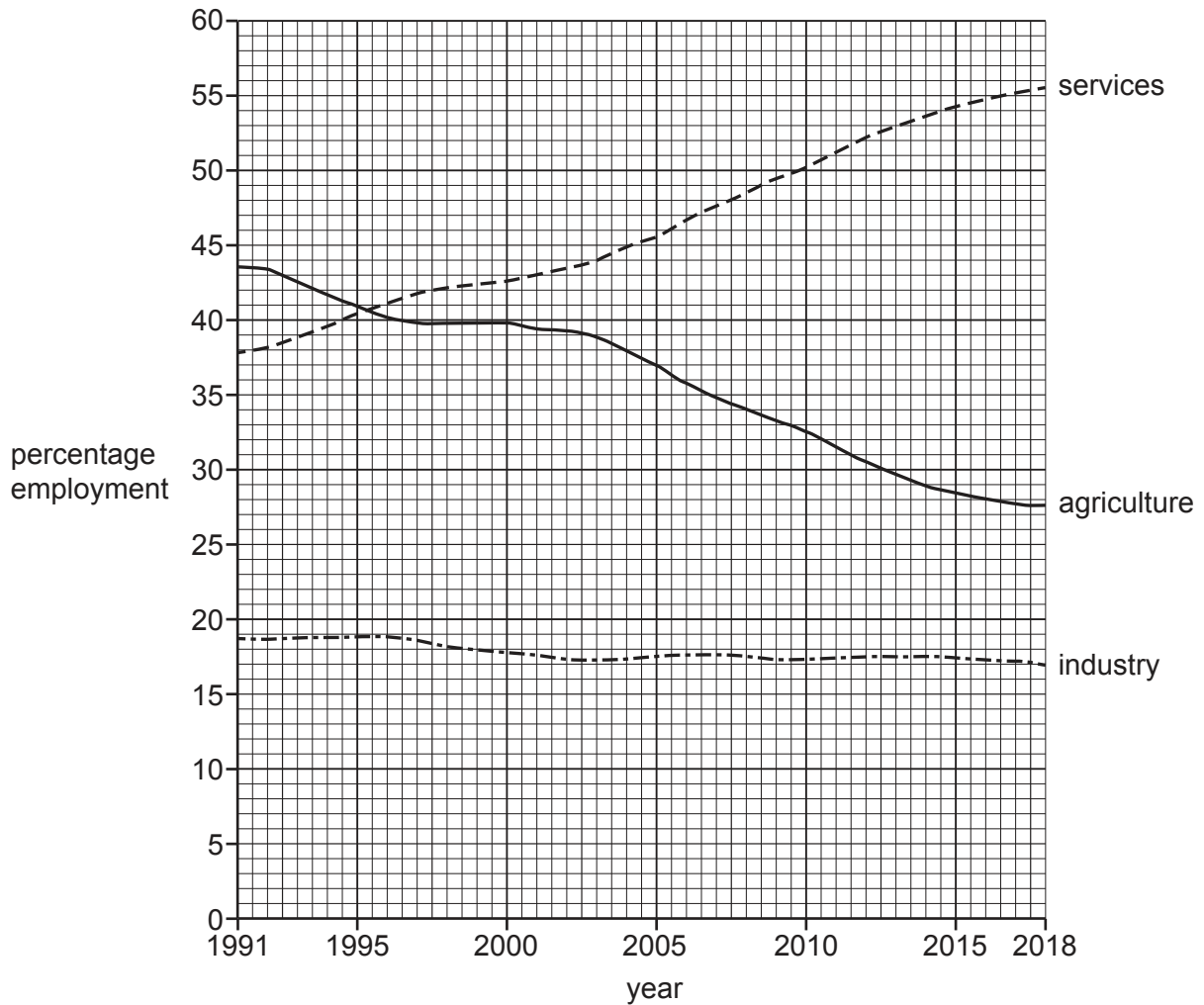


Fig. 10.1 for Question 10

Estimated female employment by sector, for the world, 1991–2018



The boundaries and names shown, the designations used and the presentation of material on any maps contained in this question paper/insert do not imply official endorsement or acceptance by Cambridge Assessment International Education concerning the legal status of any country, territory, or area or any of its authorities, or of the delimitation of its frontiers or boundaries.

Permission to reproduce items where third-party owned material protected by copyright is included has been sought and cleared where possible. Every reasonable effort has been made by the publisher (UCLES) to trace copyright holders, but if any items requiring clearance have unwittingly been included, the publisher will be pleased to make amends at the earliest possible opportunity.

To avoid the issue of disclosure of answer-related information to candidates, all copyright acknowledgements are reproduced online in the Cambridge Assessment International Education Copyright Acknowledgements Booklet. This is produced for each series of examinations and is freely available to download at www.cambridgeinternational.org after the live examination series.

Cambridge Assessment International Education is part of the Cambridge Assessment Group. Cambridge Assessment is the brand name of the University of Cambridge Local Examinations Syndicate (UCLES), which itself is a department of the University of Cambridge.